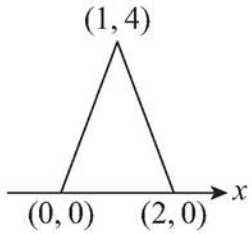


2 **Figure 1** shows $y = f(x)$.

Figure 1



Which figure below shows $y = f(2x)$?

Tick **one** box.

[1 mark]

Figure 2

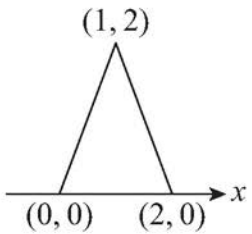


Figure 3

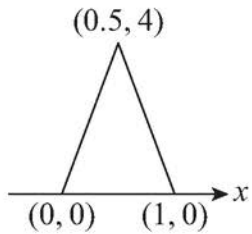


Figure 4

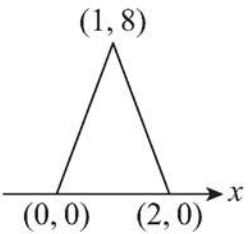


Figure 5

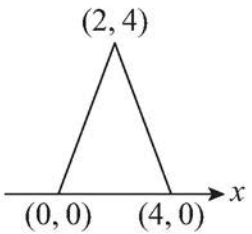


Figure 2

Figure 3

Figure 4

Figure 5