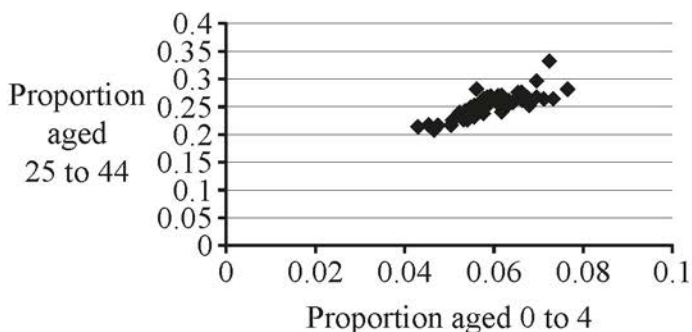
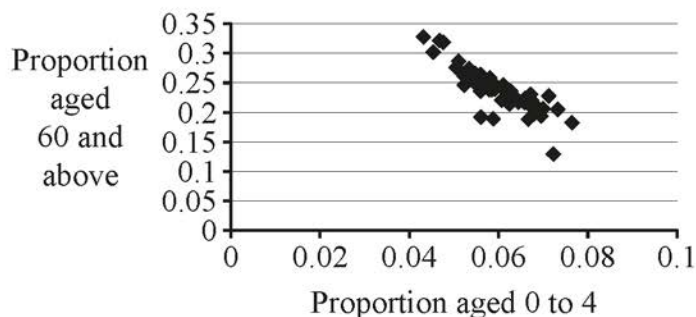


12 This question deals with information about the populations of Local Authorities (LAs) in the North of England, taken from the 2011 census.

**Fig. 1**



**Fig. 2**



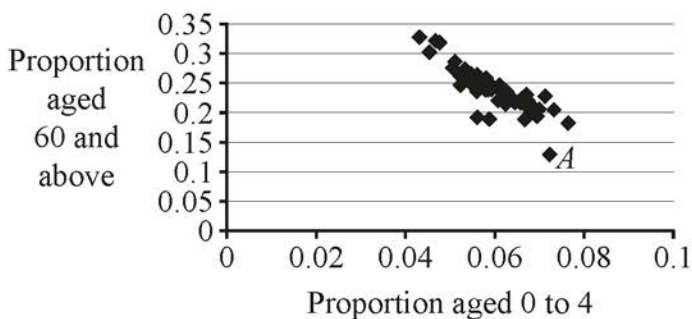
**Fig. 1** and **Fig. 2** both show strong correlation, but of two different kinds.

- (a) For each diagram, use a single word to describe the kind of correlation shown. [1]
- (b) For each diagram, suggest a reason, in context, why the correlation is of the particular kind described in part (a). [2]

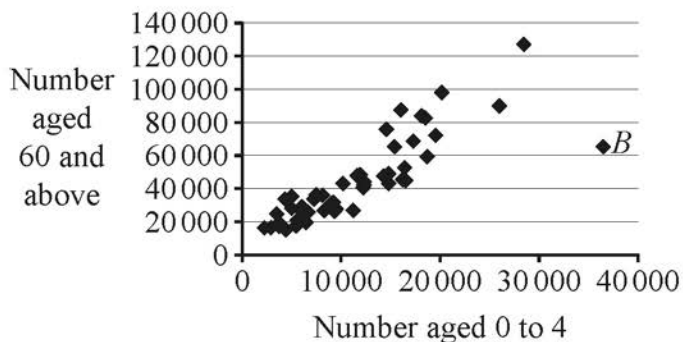
**Fig. 3** is the same as **Fig. 2** but with the point *A* marked.

**Fig. 4** shows information about the same LAs as **Fig. 2** and **Fig. 3**.

**Fig. 3**



**Fig. 4**



- (c) Point *A* in **Fig. 3** and point *B* in **Fig. 4** represent the same LA.

Explain how you can tell that this LA has a large population.

[1]